


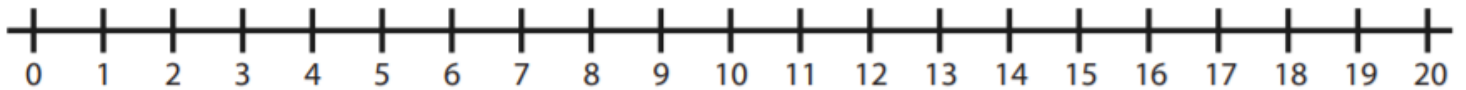
Task 1



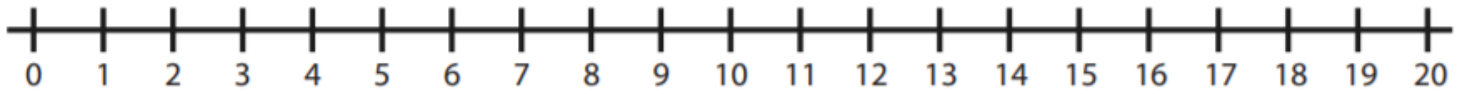
Help Beegu to solve the addition number sentences by hopping along the number line.

Remember to fill in the numbers and draw each jump in ones.

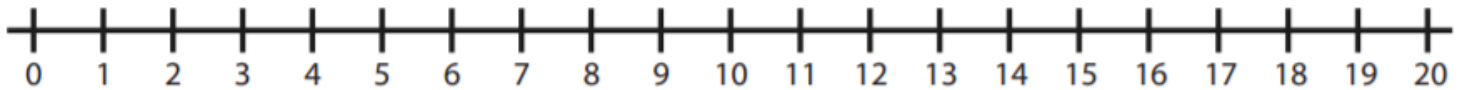
$$10 + 7 =$$



$$10 + 5 =$$



$$11 + 2 =$$



$$6 + 8 =$$



$$9 + 9 =$$

