








Task 3

Use a strategy from the video or a mental strategy to calculate the answers to the word problems.

Don't forget to write the number sentence in the box.

<u>Word Problem</u>	<u>Number sentence</u>
 <p>Beegu's spaceship travelled 56km through the sky and 35km across the ground. How far did the ship travel altogether?</p>	
<p>27 rabbits hopped down their rabbit hole and 25 rabbits hid behind the trees. How many rabbits did Beegu see in total?</p> 	
 <p>Beegu chased 56 leaves in the park and 28 leaves on the hill. How many leaves did she chase in total?</p>	
<p>Beegu saw 49 people in the street and 63 children in the playground. How many people did she see altogether?</p> 	
 <p>The phone rang 28 times. It rang again and this increased by 18 rings. How many times did the phone ring?</p>	
<p>34 girls and 29 boys hugged Beegu. How many hugs did she get altogether?</p> 	
 <p>Beegu travelled 43km up from Earth to space and 58km through space to home. How far did she travel on her way home?</p>	