

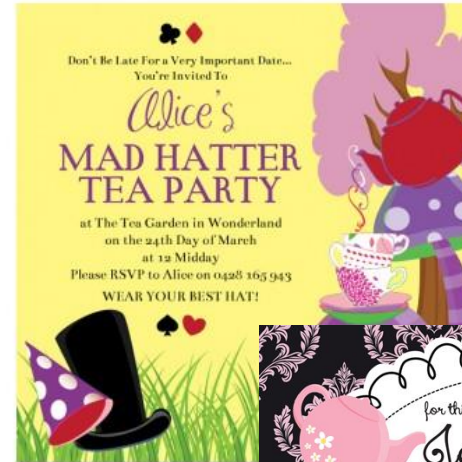


## YEAR 3 Home Learning – Alice in Wonderland week 2

You do not need to print off any of the challenges. You can complete them on a piece of paper and take a picture of your work to upload to your child's SeeSaw account.

English	Spelling	Maths	Wider Curriculum	Wellbeing
<p><b>Alice in Wonderland- The Mad Hatter's Tea party</b></p> <p><i>The Mad Hatter is always having tea because when he tried to sing for the foul-tempered Queen of Hearts, she sentenced him to death for "murdering the time", but he escapes decapitation.</i></p> <p><b>Activity 1:</b> Imagine you're hosting a tea party to celebrate something.</p> <ul style="list-style-type: none"> <li>Look at the example invitations. What features can you see?</li> <li>Can you design an invitation to your own tea party?</li> </ul> <p><b>Activity 2:</b> What will you serve at your Mad Hatter's Tea Party?</p> <ul style="list-style-type: none"> <li>Could you have character themed bread and butterfly sandwiches?</li> <li>Could you use alliteration to invent delicious treats?</li> </ul> <p><b>Activity 3:</b> <a href="#">Watch this video clip</a> of Alice joining the March Hare and the Mad Hatter for a Tea Party. Can you write a description of the party? Don't forget to include:</p> <ul style="list-style-type: none"> <li>Expanded noun phrases to describe</li> <li>Powerful verbs</li> <li>Adverbs</li> </ul>	<p><b>Homophones</b></p> <p>Two or more words having the same pronunciation but different meanings, origins, or spelling.</p> <p><b>Activity:</b> Which word is correct? Cross out the wrong homophone.</p> <p><b>Challenge:</b> Pick a group of homophones. Can you write a sentence with them in? The funnier, the better. How many can you do? Eg Which witch is which?</p>	<p><b>Time – Days, weeks and months of the year</b></p>  <p><a href="https://www.youtube.com/watch?v=RdsZT7WKjW8">https://www.youtube.com/watch?v=RdsZT7WKjW8</a></p> <p><b>Activity 1:</b> <a href="https://www.youtube.com/watch?v=FJPPWtz4HoE">https://www.youtube.com/watch?v=FJPPWtz4HoE</a> Watch the video and answer the questions</p> <p><b>Activity 2:</b> <a href="https://www.youtube.com/watch?v=bZD_BhtiXuU">https://www.youtube.com/watch?v=bZD_BhtiXuU</a> Learn the months of the year rhyme. Can you circle and answer the questions?</p> <p><b>Activity 3:</b> Using your knowledge of the months of the year, work out the calculations</p> <p><b>Activity 4:</b> Ordering dates, use your knowledge of the calendar to figure out the order of these activities</p> <p><b>Activity 5:</b> Facts and Figures. Do you know all the answers?</p>	<p><b>Design &amp; Technology - designing an ultimate sandwich</b></p> <p><b>Activity 1:</b> Look carefully at the different sandwiches. What makes them a delicious snack? ➤ Complete the sandwich evaluation.</p> <p><b>Activity 2:</b> What would be your ultimate sandwich? Would you have bread, a muffin or a wrap? Would you stuff it with sweet or savoury fillings? ➤ Use the prompts to design your ultimate sandwich.</p> <p><b>Activity 3:</b> If you are able to, make your ultimate sandwich. Remember to stay safe in the kitchen. <i>Don't worry if you can't make your sandwich – this is a Mad Hatter Tea Party and imaginary sandwiches are even more delicious!</i></p> <p><b>Activity 4:</b> Was your sandwich a success? ➤ Complete the evaluation to rate your sandwich.</p>	<p><b>Happy Playlist</b></p> <p>What music would you play at a Mad Tea Party?</p> <p>What are your favourite songs? Would you play them at your tea party?</p> <p>Create a playlist of 5 -10 songs that you would play at the tea party.</p> <p>Can you explain why you would play those songs?</p> 






## Features of an Invitation...







# MAD HATTER MENU



- ☞ *Tweddledee's Smoked Salmon Bites*
- ☞ *Humpty's Pesto-Goat Cheese Diamonds*
- ☞ *The Queen's Bleu Cheese & Caramelized Onion Tarts*
- ☞ *Cheshire Cat's Curried Chicken on Marble Rye*
- ☞ *Alice's Strawberry-Ginger Cream on Ginger Hearts*
- ☞ *March Hare's Matcha Shortbread Shamrocks*
- ☞ *Cherry-Almond Dormice*




What would you like  
to eat and drink at a  
Mad Hatter Tea  
Party?

## Alliteration

-the repetition of the  
same letter or sound  
within a group of words

Sammy the  
Snake slithered  
through the soft  
sand.







*Mad Tea Party Food*



*Mad Tea Party Cakes*

*Mad Tea Party Drinks*





*Don't forget to check  
your writing.*

### Add things:

Detail:

☐ adjectives

☐ simile

☐ adverbs

☐ powerful verbs

☐ Add more interesting or complex conjunctions

☐ Add Interesting openings to sentences

☐ Add an extra sentence – multclause or short sentence for effect

Add more interesting punctuation:

☐

?

☐

!

☐

()

☐

:

☐

;



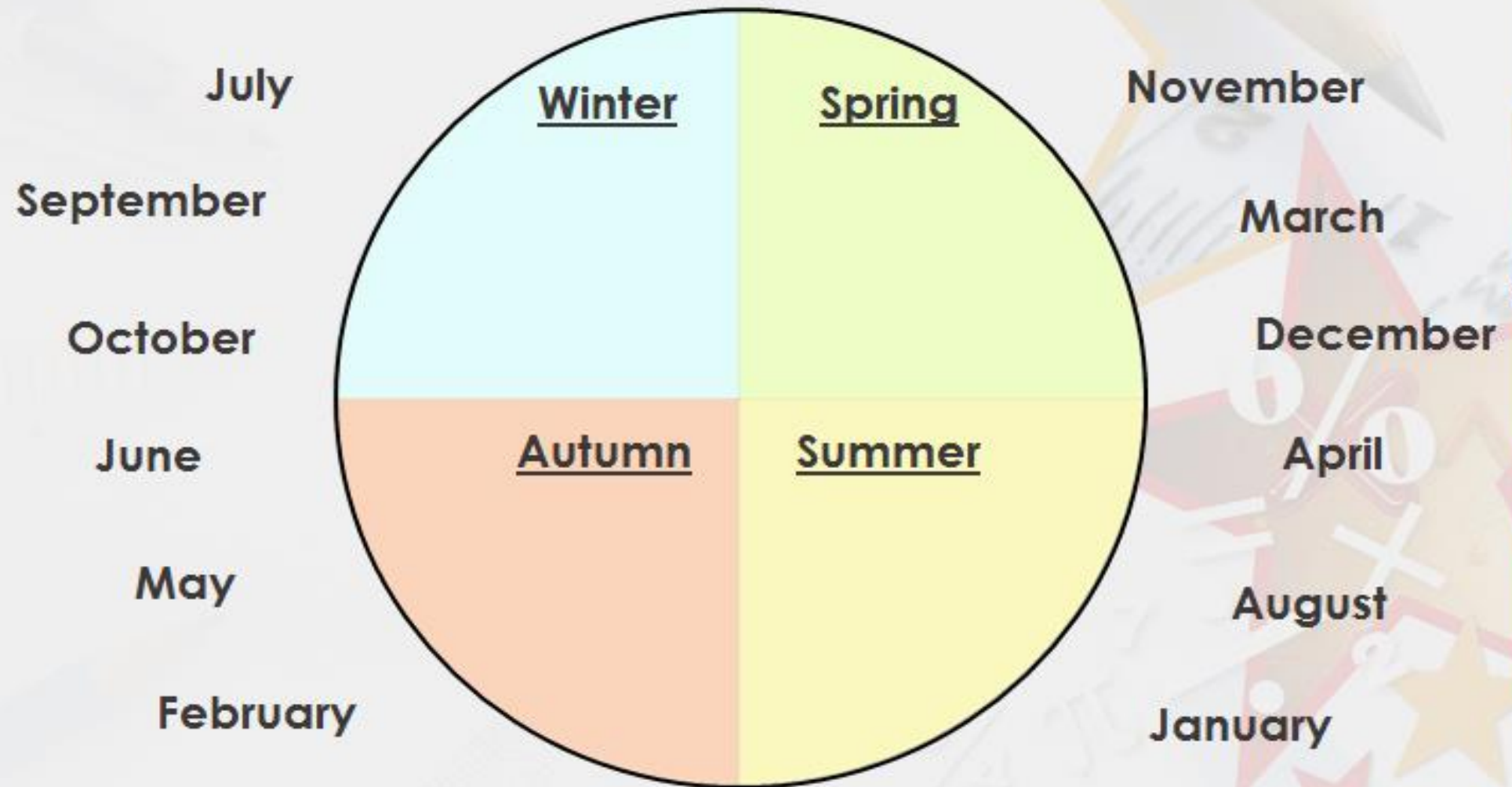
1. Last knight/night, I went for a walk in the moonlight.
2. Blue/blew is my favourite colour.
3. If you want to go on holiday, you'll have to catch a plane/plain.
4. I brush my hare/hair every day.
5. The lion had huge paws/pours.
6. Thomas couldn't wait to meat/meet the new teacher.
7. Bernard got mud on his new/knew shoes.
8. I'm over here/hear!
9. Benny's hiding over they're/there/their.
10. Suzanne scraped her knee and now it's really saw/sore.

# Homophones

## Word Mat



Decide which month should go in which season and place them in the correct order.





1. In which season would you be most likely to build a snowman?

.....

2. In which season are you most likely to see leaves starting to grow on trees?

.....

3. Which season is usually the hottest in the UK?

.....


4. In which season does the new school year start?

.....

**30** days have **September,**  
**April, June** and  
**November.**



All the rest have **31**  
except **February** alone  
which has but **28** days clear  
and **29** in each Leap Year



1a. Circle the month or months that do not have 30 days in total.

October

February

April



VF

1b. Circle the month or months that have 30 days in total.

November

August

June



VF

5a. Circle the month or months that do not have 31 days in total.

The fourth  
month of  
the year

March

The month  
after  
October



VF

5b. Circle the month or months that have 31 days in total.

The second  
month of  
the year

January

The month  
after  
August



VF





1. How many months normally have 28 days?

2. How many months have 30 days?

3. How many months have 31 days?

4. Which months have more days than June?

5. Name two consecutive winter months that have 31 days.

**2a. Fill in the missing date.**

29 <sup>th</sup> May	30 <sup>th</sup> May	
----------------------	----------------------	--



VF

**2b. Fill in the missing date.**

	1 <sup>st</sup> July	2 <sup>nd</sup> July
--	----------------------	----------------------



VF

**6a. Write the date a week later.**

27 <sup>th</sup> June	
19 <sup>th</sup> March	



VF

**6b. Write the date a week later.**

5 <sup>th</sup> July	
2 <sup>nd</sup> February	



VF

1. Altogether April, May and June have ..... days.
2. Altogether January, February and March in a leap year have ..... days.
3. Altogether October, November and December have ..... days.
4. Altogether August, September and October have ..... days.

6a. Complete the table about the siblings' dates of birth using the information below.

		/	1	/	2008
		/	4	/	2005
Michael	5	/		/	2010

Katie's birthday is on the first day of a month with seven letters.

Phillipa is the eldest.

Phillipa birthday is on the 2<sup>nd</sup>.

Michael was born in the same month as Katie.



PS

6b. Complete the table about the siblings' dates of birth using the information below.

		/	7	/	2006
Yasmin	8	/	10	/	2006
		/		/	2003

Yasmin was born in the same year as Fahad.

Fahad's birthday is on 4<sup>th</sup> of the month.

Mina is the eldest. Her birthday is 2 days before Yasmin's.



PS





I have got some dates to put on the calendar, can you work out the dates and order them from earliest to latest in the year.

Hint: A calendar might be useful.


1.

Carnival: 2<sup>nd</sup> day of the seventh month

Gnome hunt: 17<sup>th</sup> July

Carol concert: is on the 12<sup>th</sup> day of the last month of the year

School play: 3 days before the carnival



1<sup>st</sup> (earliest) .....

2<sup>nd</sup> .....

3<sup>rd</sup> .....

4<sup>th</sup> (latest) .....

2.

School trip: 14<sup>th</sup> July

Cycle race: last day of February in a leap year

Pancake race: 5<sup>th</sup> day of the month after February

Pet show: 6 days before the school trip

1<sup>st</sup> (earliest) .....

2<sup>nd</sup> .....

3<sup>rd</sup> .....

4<sup>th</sup> (latest) .....





364 unbirthdays + your  
birthday = 365 days in a  
year.

Unless it is a leap year, in  
which case there are 366  
days in a year.

IP

But there are 364 unbirthdays

N





Try and answer the questions below.

1. How many days in a week?
2. How many months in a year?
3. How many weeks in a year?
4. What is the first month of the year?
5. What is the last month of the year?
6. How many hours in a day?
7. How many minutes in an hour?
8. How many seconds in a minute?
9. How many days in April?
10. How many days in February?



# My Tea Party Song List

*Creating the ultimate sandwich – step one: sandwich evaluation.*



Have a look at these sandwiches. Do you know what each one is? Do they look appealing? Which would you most and least like to eat and why?



BACK

NEXT

*Creating the ultimate sandwich – step one: sandwich evaluation.*

<b>Sandwich</b>	<b>Bread Type</b>	<b>Possible filling</b>	<b>Appearance</b> Marks out of 10	<b>Possible taste</b> Marks out of 10
<b>1</b>				
<b>2</b>				
<b>3</b>				
<b>4</b>				
<b>5</b>				
<b>6</b>				





*Creating the ultimate sandwich – step two: design.*

## Design a Sandwich



**Design and create your own sandwich. Plan out your design below.**

<b>Bread</b>	
<b>Butter</b>	
<b>Fillings</b>	
<b>Sauces/Condiments</b>	



*Creating the ultimate sandwich – step two: design.*


This is what my sandwich might look like:



*Creating the ultimate sandwich – step three: making.*

After getting permission and help from a grown up at home, have a go at making your ultimate sandwich. Can you post a photograph on SeeSaw or Twitter?

Remember to stay safe in the kitchen. Can you spot any dangers?



*Creating the ultimate sandwich – step four: evaluation.* How was your ultimate sandwich?

Drawing or photo of your finished sandwich:

**Evaluation.**

*Choose 8 different criteria to evaluate your sandwich upon. Give each one a mark out of 10.*

